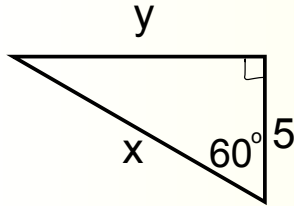


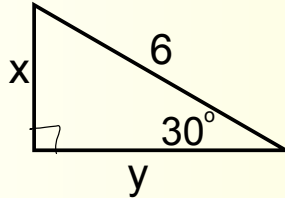
### Warm Up #13-1

Find  $x$  &  $y$  exact and simplified.

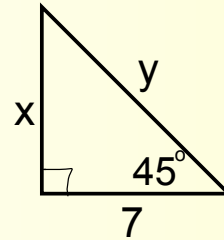
1)



2)



3)



4) Find  $x$  exact and simplified.

a)  $x = \cos 60^\circ$     b)  $x = \sin 60^\circ$     c)  $x = \tan 60^\circ$

HW: Check your answers online for the practice exam. Continue working on the yellow, 2015 Paper 1 practice exam.